

### Thm 37

Given  $\triangle ABC$  and  $\triangle DEF$  such that

$$\overline{AB} \cong \overline{DE} \quad (1)$$

$$\overline{BC} \cong \overline{EF} \quad (2)$$

$$\overline{AC} \cong \overline{DF} \quad (3)$$

By Ax 3, there is an isometry  $f$ , such that

$$f(A) = D \quad (4)$$

$$f(C) \in \overrightarrow{DF} \quad (5)$$

$f(B) \in$  side of  $\overleftrightarrow{DF}$  without  $E$ . Let  $f(B) = B'$ ,

By Thm 26 and lines (3, 4, 5)  $f(C) = F \quad (7)$

By isometry  $\overline{AB} \cong \overline{DB'} \quad (8)$

By substitution (1, 8)  $\overline{DB'} \cong \overline{DE} \quad (9)$

By isometry  $\overline{BC} \cong \overline{B'F} \quad (10)$

By substitution (2, 10),  $\overline{B'F} \cong \overline{EF} \quad (11)$

$\overline{DF} \cong \overline{DF} \quad (12)$

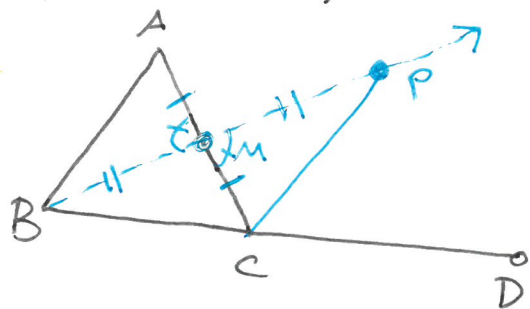
By thm 36 (9, 11, 12)  $\triangle DEF \cong \triangle DB'F$

By isometry  $\triangle ABC \cong \triangle DB'F$

By thm 17,  $\triangle ABC \cong \triangle DEF$

Proof of 40 a

Given  $\triangle ABC$ , extend  $\overline{BC}$  to  $\overline{BD}$



By thm 39,  $\overline{AC}$  has a midpoint,  $M$

$$\text{so } \overline{AM} \cong \overline{MC} \quad (1)$$

Construct  $\overrightarrow{BM}$

\* or "consider"

By Axiom 5, there exists a point  $P$  on  $\overrightarrow{BM}$

such that  $\underline{BP} = 2 \underline{BM}$

and  $\underline{BM} + \underline{MP} = \underline{BP}$  (defn. of Ray & segment)

$$\text{so } \overline{BM} \cong \overline{MP} \quad (2)$$

Consider  $\triangle ABM$ ,  $\triangle CPM$

\* or construct

By thm 29  $\angle AMB \cong \angle CMP$  (3)

By SAS and (1, 2, 3)

$$\triangle ABM \cong \triangle CPM$$

so (CPCTC)  $\angle BAM \cong \angle PCM$

By Ax. 4  $m \angle ACD = m \angle PCM + m \angle PCD$

$$\text{so } m \angle ACD > m \angle PCM = m \angle BAM = m \angle BAC$$

$$\therefore m \angle ACD > m \angle BAC$$

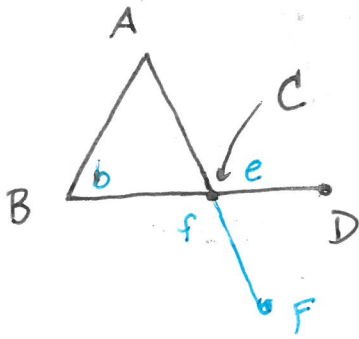
□

optional:

$$\underline{BP} + \underline{PM} = \underline{BM} \text{ or } \underline{BM} + \underline{MP} = \underline{BP}$$

but  $\underline{BP} > \underline{BM}$ , so  
 $\underline{BM} + \underline{MP} = \underline{BP}$   
 substituting, we get  
 $\underline{BM} + \underline{MP} = 2 \underline{BM}$   
 so  $\underline{MP} = \underline{BM}$

Thm 40 b



Given  $\triangle ABC$ , with  $\overline{BC}$  extended to  $\overline{BD}$

Extend  $\overline{AC}$  to  $\overline{AF}$

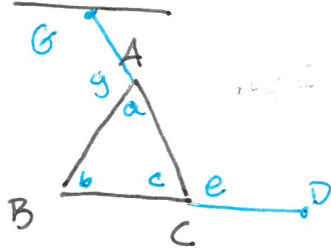
Name  $m\angle ABC = b$   
 $m\angle ACD = e$   
 $m\angle BCF = f$

By 40a,  $b < f$

By 39,  $f = e$

By substitution  $b < e$

Thm 41



Given  $\triangle ABC$ , name interior angle measures:

$m\angle BAC = a$        $m\angle ABC = b$        $m\angle ACB = c$

Extend  $\overline{BC}$  to  $D$ .

Name exterior angle measure  $m\angle ACD = e$

By thm 40  $a < e$ ,  $b < e$  (1), (2)

By thm 25  $c + e = 180^\circ$  (3)

By substitution  $180^\circ = c + e > c + a$  (1, 3)

$180^\circ = c + e > c + b$  (2, 3)

Extend  $\overline{CA}$  to  $\overline{CG}$

name exterior angle measure  $m\angle BAG = g$

By thm 40  $g > b$

by thm 25  $a + g = 180^\circ$

By substitution  $180^\circ = a + g > a + b$

so  $a + b$ ,  $a + c$ ,  $b + c$  are all  $< 180^\circ$

Thm 44: Given that line  $t$  intersects lines  $l$  and  $m$  in points  $A$  and  $B$  respectively.

name the interior angle measures on one side of  $t$   $a$  and  $b$  (at  $A$  and  $B$  respectively) and name the interior angle measures on the other side  $c$  and  $d$  respectively

Suppose  $l$  and  $m$  are not parallel.

Then  $l$  and  $m$  intersect.

Name  $P = l \cap m$ .

Then  $\triangle ABP$  is a triangle, and either  $a$  and  $b$  are interior angle measures of  $\triangle ABP$

or  $c$  and  $d$  are interior angle measures of  $\triangle ABP$ .

We are given  $a+b=180^\circ$  or  $c+d=180^\circ$  by Thm 43, both  $a+b=180^\circ$  and  $c+d=180^\circ$  which contradicts Thm 41

so  $l$  and  $m$  are parallel

