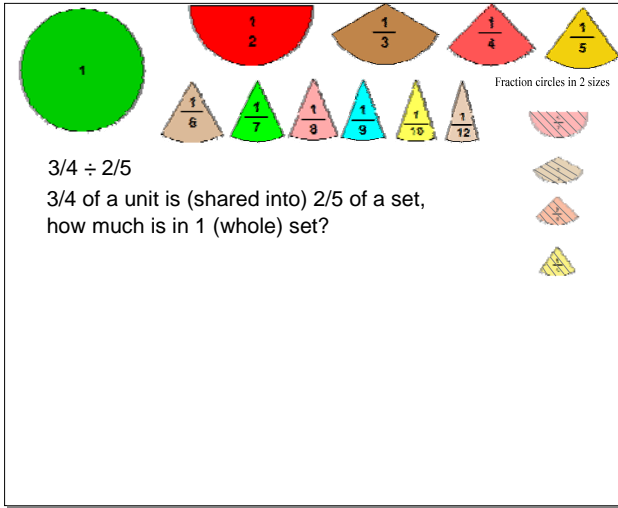
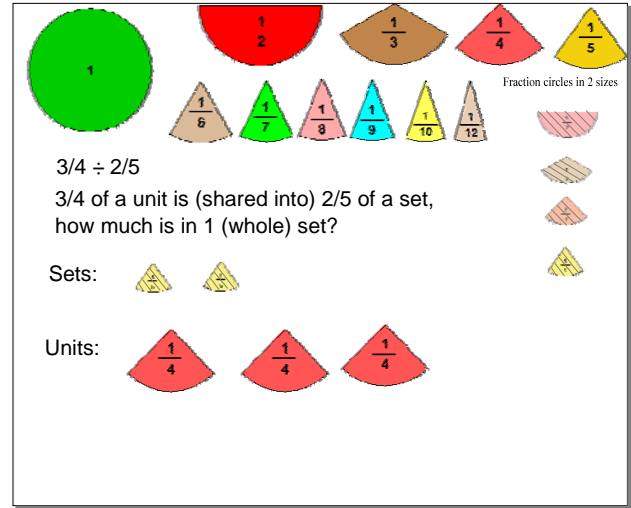


# Montessori Fraction Division



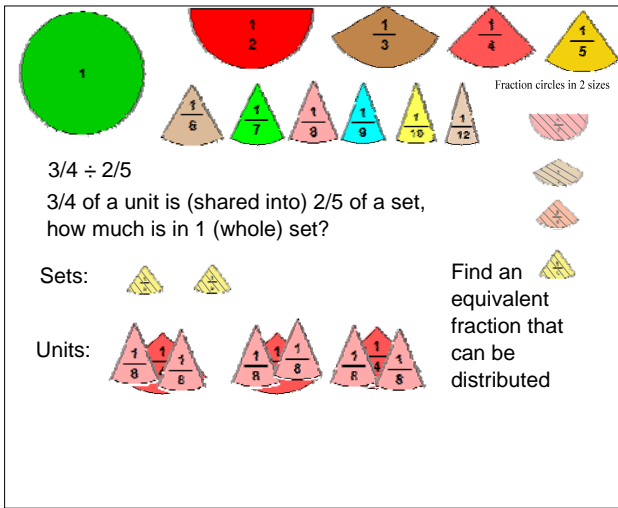
$3/4 \div 2/5$   
 $3/4$  of a unit is (shared into)  $2/5$  of a set,  
 how much is in 1 (whole) set?



$3/4 \div 2/5$   
 $3/4$  of a unit is (shared into)  $2/5$  of a set,  
 how much is in 1 (whole) set?

Sets:  $2/5$   $2/5$

Units:  $1/4$   $1/4$   $1/4$

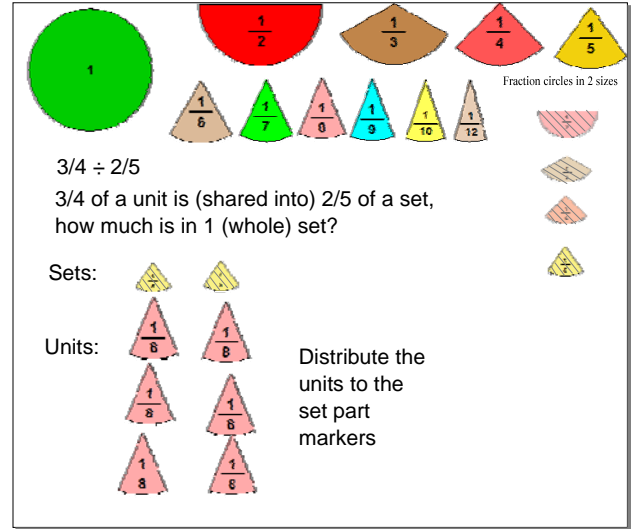


$3/4 \div 2/5$   
 $3/4$  of a unit is (shared into)  $2/5$  of a set,  
 how much is in 1 (whole) set?

Sets:  $2/5$   $2/5$

Units:  $1/8$   $1/8$   $1/8$   $1/8$   $1/8$   $1/8$

Find an equivalent fraction that can be distributed

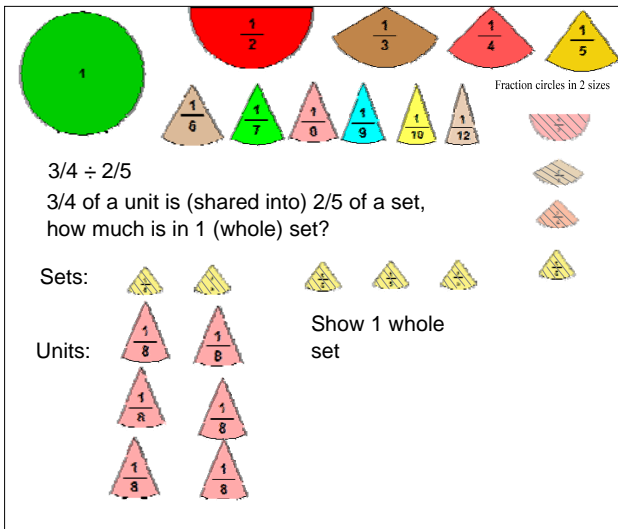


$3/4 \div 2/5$   
 $3/4$  of a unit is (shared into)  $2/5$  of a set,  
 how much is in 1 (whole) set?

Sets:  $2/5$   $2/5$

Units:  $1/8$   $1/8$   $1/8$   $1/8$   $1/8$   $1/8$

Distribute the units to the set part markers

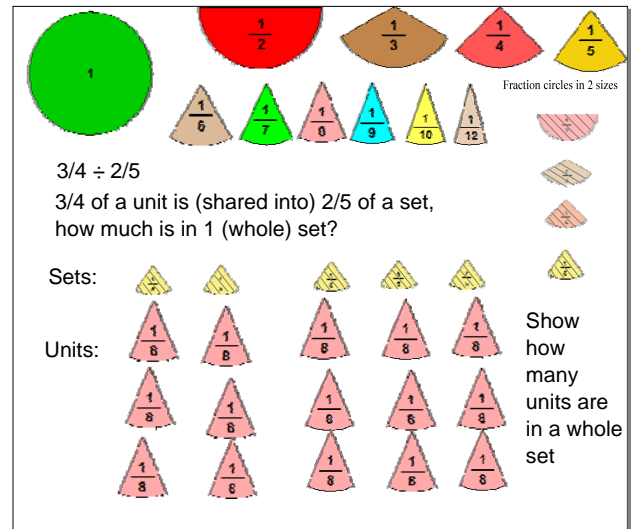


$3/4 \div 2/5$   
 $3/4$  of a unit is (shared into)  $2/5$  of a set,  
 how much is in 1 (whole) set?

Sets:  $2/5$   $2/5$   $2/5$   $2/5$   $2/5$   $2/5$

Units:  $1/8$   $1/8$   $1/8$   $1/8$   $1/8$   $1/8$

Show 1 whole set



$3/4 \div 2/5$   
 $3/4$  of a unit is (shared into)  $2/5$  of a set,  
 how much is in 1 (whole) set?

Sets:  $2/5$   $2/5$   $2/5$   $2/5$   $2/5$   $2/5$

Units:  $1/8$   $1/8$   $1/8$   $1/8$   $1/8$   $1/8$   $1/8$   $1/8$   $1/8$   $1/8$

Show how many units are in a whole set