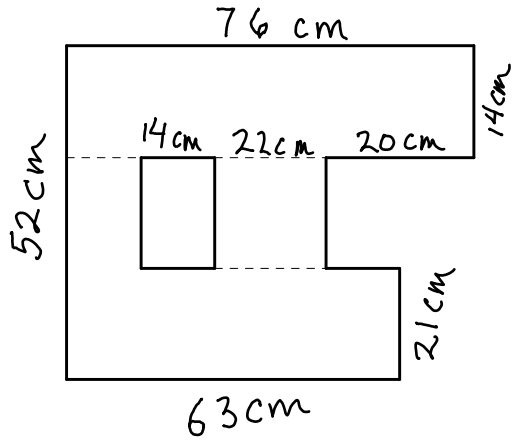


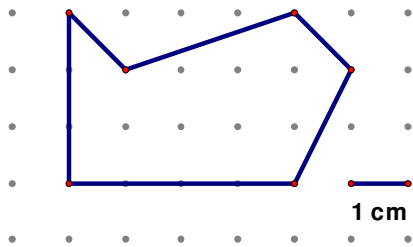
Area problems assn 1:

Find the area of each, using the given information. You may use another sheet of paper. Do a clear, easy to follow, "teacher" solution.

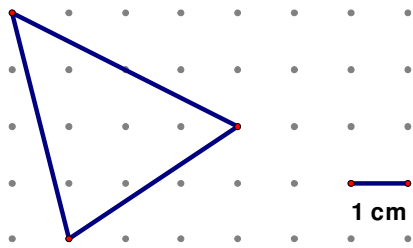
1.



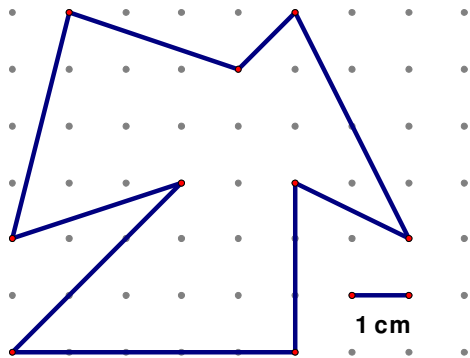
2.



3.



4.



5. Explain why the area of a rectangle that is 5 cm wide and 7 cm high has area  $5 \times 7 \text{ cm}^2$