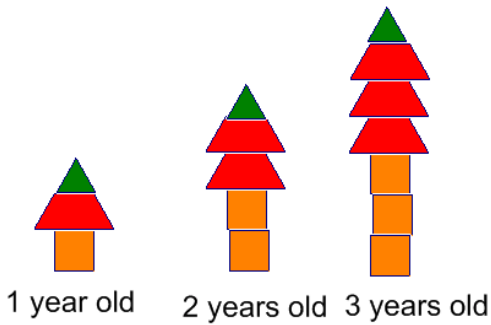


Here are some pattern block trees:



Here are some questions to ask students about pattern block trees:

1. Build a 4 year old tree from pattern blocks.

2. Count the number of blocks and finish the table:

years	blocks
1	3
2	5
3	
4	

3. How many blocks would it take to make a 5 year old tree?




4. How many blocks would it take to make a 7 year old tree?

5. How many blocks would it take to make a 20 year old tree?

6. How many blocks would it take to make a 100 year old tree?

What grade level is this a good problem for?

7. How is this table different from the table in #2? In what ways is it more complicated? Easier?

Years	Which Blocks? How Many?			Total Number of Blocks		
						
1	1	+	1	+	1	3
2						
3						