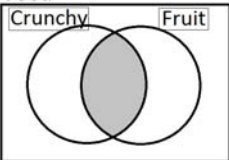
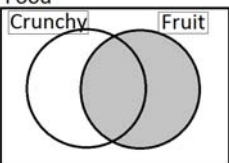
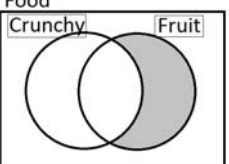
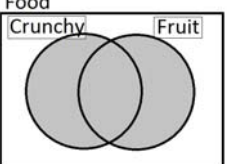
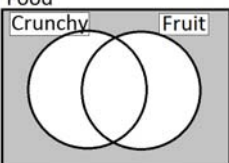
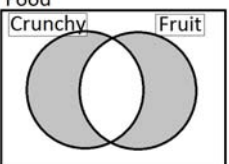
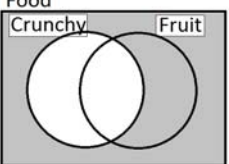


**Math 246 Communicating about sets assignment:**

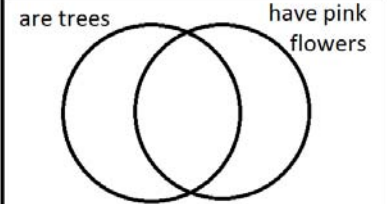
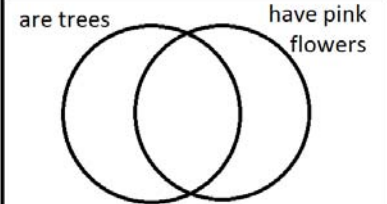
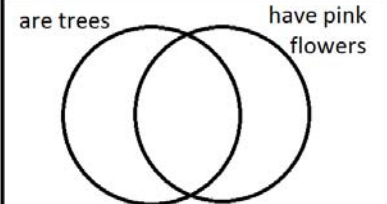
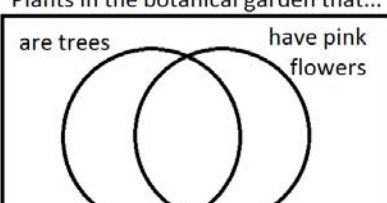
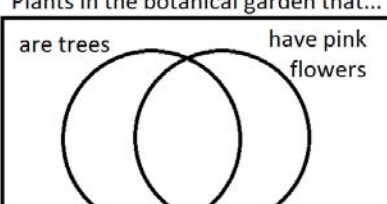
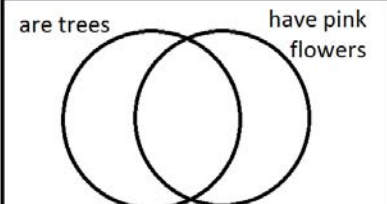
**name:** \_\_\_\_\_

10am/2 pm

The diagrams below show a pair of intersecting sets in the universe of food. The set on the left is crunchy food and the set on the right is fruit. Write a sentence or noun phrase describing the elements in the shaded part of the set diagram

Set	Sentence:
<p>Food</p> 	
<p>Food</p> 	
<p>Food</p> 	
<p>Food</p> 	
<p>Food</p> 	
<p>Food</p> 	
<p>Food</p> 	

Shade to show each description

Set	Sentence:
<p>Plants in the botanical garden that...</p> <p>are trees                      have pink flowers</p> 	<p>Trees with pink flowers</p>
<p>Plants in the botanical garden that...</p> <p>are trees                      have pink flowers</p> 	<p>Plants that are trees or have pink flowers</p>
<p>Plants in the botanical garden that...</p> <p>are trees                      have pink flowers</p> 	<p>Plants that are neither trees nor have pink flowers</p>
<p>Plants in the botanical garden that...</p> <p>are trees                      have pink flowers</p> 	<p>Trees</p>
<p>Plants in the botanical garden that...</p> <p>are trees                      have pink flowers</p> 	<p>Plants that do not have pink flowers</p>
<p>Plants in the botanical garden that...</p> <p>are trees                      have pink flowers</p> 	<p>Trees that do not have pink flowers</p>