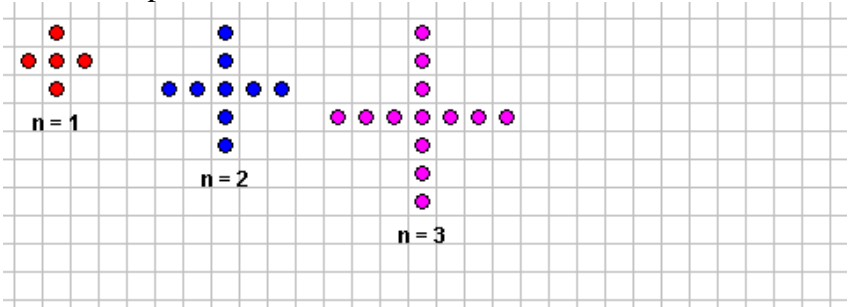
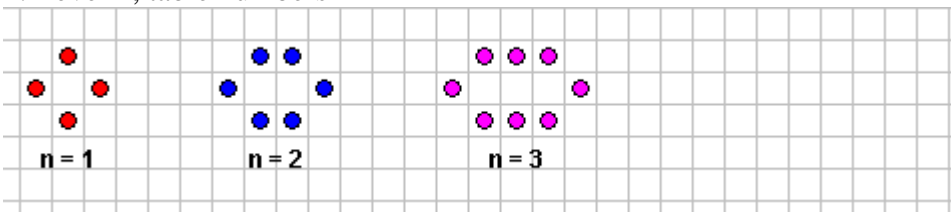
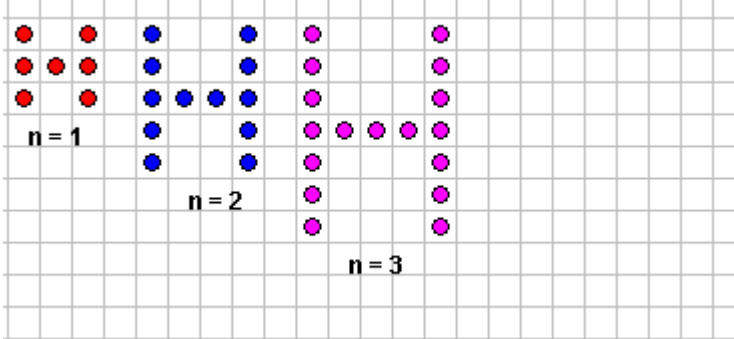
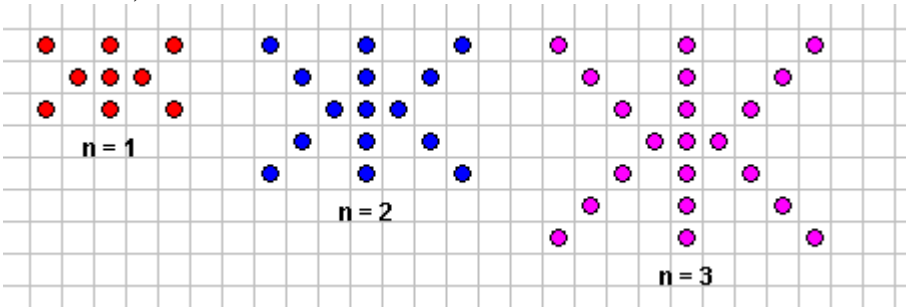


**Find algebraic equations** for each of these patterns, using the web-tool to guide your thinking and check your answers. Then **circle parts of the patterns** that fit your equation, and **write (sentences) an explanation of how the equation fits the visual patterns:**

<p>1. Level 1, plus numbers</p> 	<p>Equation and explanation:</p>
<p>2. Level 1, table numbers</p> 	<p>Equation and explanation:</p>
<p>3. Level 1, H numbers 2</p> 	<p>Equation and explanation:</p>
<p>4. Level 2, insect numbers</p> 	<p>Equation and explanation:</p>