

Review for final exam part 2

Problems 1-5: Prove each max/min/neither statement. You can use the first derivative test, the second derivative test, or show a graph. (In each case you must show that the first derivative is 0 at that point).

1. Prove that $y = x^2 - 4x + 3$ has a local minimum when $x=2$
2. Prove that $y = x^3 - 6x^2 + 12x - 5$ has a critical point (first derivative is 0) that is neither a max nor a min when $x=2$
3. Prove that $y = x^4$ has a local minimum when $x=0$
4. Prove that $y = 2x - e^x$ has a local maximum when $x=\ln 2$
5. Prove that $y = xe^x$ has a local minimum when $x = -1$

Problems 6-12: Practice finding the integrals. Some will need a u-substitution. Some will have numbers to plug in, and some will not.

6. $\int e^{2x} + \frac{3}{x} dx$
7. $\int \frac{x}{3} + \frac{2}{x} + \frac{4}{x^2} dx$
8. $\int xe^{x^2+3} dx$
9. $\int \frac{5}{3x+2} dx$
10. $\int_0^4 x\sqrt{2x^2+4} dx$
11. $\int_1^2 \frac{5}{x} + \frac{x}{5} dx$
12. $\int_0^1 5x + \sqrt{3x+1} dx$

Answers

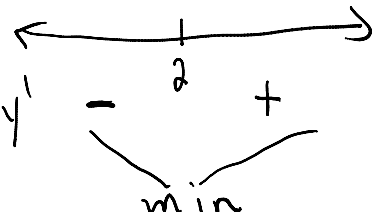

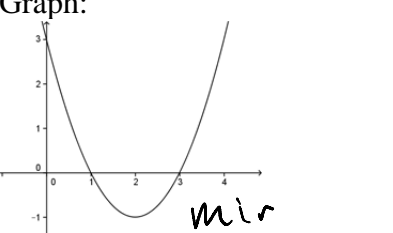
1. Check first derivative:

$$y = x^2 - 4x + 3$$

$$y' = 2x - 4$$

$$y'(2) = 2 \cdot 2 - 4 = 0$$

Then do *one* of the following 3 things:

<p>First derivative test:</p> 	<p>Second derivative test:</p> $y'' = 2 > 0$ 	<p>Graph:</p> 
---	--	---

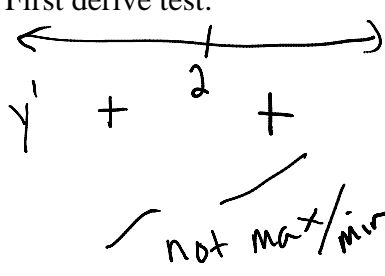
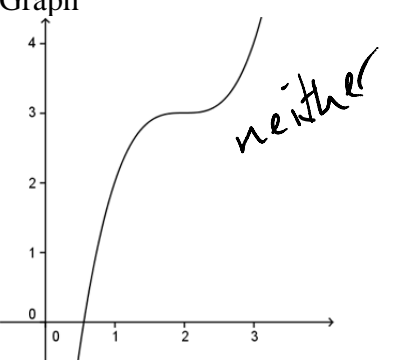
2. Check first derivative:

$$y = x^3 - 6x^2 + 12x - 5$$

$$y' = 3x^2 - 12x + 12$$

$$y'(2) = 12 - 24 + 12 = 0$$

Then do one of the following 3 2 things:

<p>First derive test:</p> 	<p>Second derive test:</p> $y'' = 6x - 12$ $y''(2) = 6 \cdot 2 - 12 = 0$ <p>Because second derivative is 0, it doesn't tell us if the point is a max, min or neither</p>	<p>Graph</p> 
--	---	---


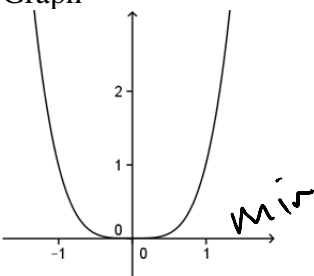
3. Check first derivative:

$$y = x^4$$

$$y' = 4x^3$$

$$y'(0) = 0$$

Then do one of the following 3 things:

<p>First derivative test:</p> 	<p>Second derivative test:</p> $y'' = 12x^2$ $y''(0) = 0$ <p>Because second derivative is 0, it doesn't tell us if the point is a max, min or neither</p>	<p>Graph</p> 
---	--	--

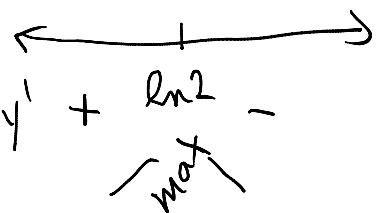
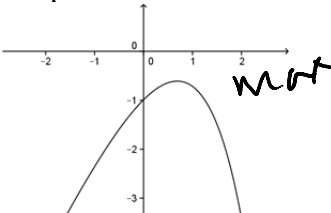
4. Check first derivative:

$$y = 2x - e^x$$

$$y' = 2 - e^x$$

$$y'(\ln 2) = 2 - e^{\ln 2} = 2 - 2 = 0$$

Then do *one* of the following 3 things:

<p>First derivative test:</p> 	<p>Second derivative test:</p> $y'' = -e^x$ $y''(\ln 2) = -e^{\ln 2} = -2 < 0$ <p>max</p>	<p>Graph:</p> 
---	---	---

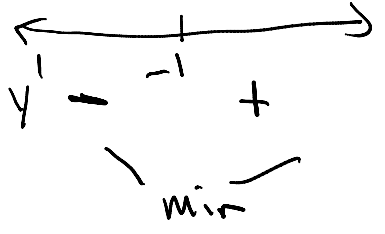
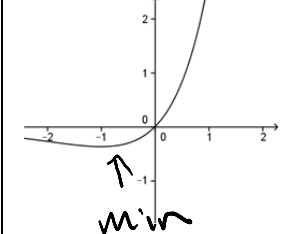
5. Check first derivative:

$$y = xe^x$$

$$y' = 1 \cdot e^x + x \cdot e^x$$

$$y'(-1) = e^{-1} + (-1) \cdot e^{-1} = e^{-1} - e^{-1} = 0$$

Then do *one* of the following 3 things:

<p>First derivative test:</p> 	<p>Second derivative test:</p> $y' = e^x + xe^x$ $y'' = e^x + 1 \cdot e^x + x \cdot e^x = 2e^x + xe^x$ $y''(-1) = 2e^{-1} - e^{-1} = e^{-1} = 1/e > 0$ <p>min U</p>	<p>Graph:</p> 
---	---	---

$$\begin{aligned}
6. \int e^{2x} + \frac{3}{x} dx &= \int e^{2x} dx + \int \frac{3}{x} dx \\
\int e^{2x} dx \quad u &= 2x & \int \frac{3}{x} dx \\
= \int e^u \cdot \frac{1}{2} du \quad \frac{du}{dx} &= 2 & = \int 3 \cdot \frac{1}{x} dx \\
= \frac{1}{2} e^u + C \quad \frac{1}{2} du &= dx & = 3 \ln |x| + C \\
= \frac{1}{2} e^{2x} + C
\end{aligned}$$

$$\int e^{2x} + \frac{3}{x} dx = \frac{1}{2} e^{2x} + 3 \ln |x| + C$$

$$7. \int \frac{x}{3} + \frac{2}{x} + \frac{4}{x^2} dx = \int \frac{1}{3} \cdot x + 2x^{-1} + 4x^{-2} dx = \frac{1}{3} \cdot \frac{x^2}{2} + 2 \ln |x| + 4 \cdot \frac{x^{-1}}{-1} + C = \frac{x^2}{6} + 2 \ln |x| - \frac{4}{x} + C$$

$$8. \int x e^{x^2+3} dx$$

$$u = x^2 + 3$$

$$\frac{du}{dx} = 2x$$

$$\frac{1}{2x} du = dx$$

$$\int x e^{x^2+3} dx = \int x e^u \cdot \frac{1}{2x} du = \int \frac{1}{2} e^u du = \frac{1}{2} e^u + C = \frac{e^{x^2+3}}{2} + C$$

$$9. \int \frac{5}{3x+2} dx$$

$$u = 3x + 2$$

$$\frac{du}{dx} = 3$$

$$\frac{1}{3} du = dx$$

$$\int \frac{5}{3x+2} dx = \int \frac{5}{u} \cdot \frac{1}{3} du = \int \frac{5}{3} u^{-1} du = \frac{5}{3} \ln |u| + C = \frac{5}{3} \ln |3x+2| + C$$

$$10. \int_0^4 x\sqrt{2x^2+4} dx$$

$$u = 2x^2 + 4$$

$$\frac{du}{dx} = 4x$$

$$\frac{1}{4x} du = dx$$

$$\int x\sqrt{2x^2+4} dx = \int x\sqrt{u} \cdot \frac{1}{4x} du = \int \frac{1}{4} u^{1/2} du = \frac{1}{4} \cdot \frac{u^{3/2}}{(3/2)} + C = \frac{1}{4} \cdot \sqrt{u}^3 \cdot \frac{2}{3} + C = \frac{\sqrt{2x^2+4}^3}{6} + C$$

$$\int_0^4 x\sqrt{2x^2+4} dx = \frac{\sqrt{2x^2+4}^3}{6} \Big|_0^4 = \frac{\sqrt{32+4}^3}{6} - \frac{\sqrt{0+4}^3}{6} = \frac{6^3}{6} - \frac{2^3}{6} = \frac{208}{6} = \frac{104}{3} = 34\frac{2}{3}$$

Alternate notation for #10:

$$u = 2x^2 + 4$$

$$\frac{du}{dx} = 4x$$

$$\frac{1}{4x} du = dx$$

$$\int_0^4 x\sqrt{2x^2+4} dx = \int_{x=0}^4 x\sqrt{u} \cdot \frac{1}{4x} du = \int_{x=0}^4 \frac{1}{4} u^{1/2} du = \frac{1}{4} \cdot \frac{u^{3/2}}{(3/2)} \Big|_{x=0}^4 = \frac{1}{4} \cdot \sqrt{u}^3 \cdot \frac{2}{3} \Big|_{x=0}^4$$

$$\frac{\sqrt{2x^2+4}^3}{6} \Big|_0^4 = \frac{\sqrt{32+4}^3}{6} - \frac{\sqrt{0+4}^3}{6} = \frac{6^3}{6} - \frac{2^3}{6} = \frac{208}{6} = \frac{104}{3} = 34\frac{2}{3}$$

$$11. \int_1^2 \frac{5}{x} + \frac{x}{5} dx = \int_1^2 5 \cdot \frac{1}{x} + \frac{1}{5} \cdot x dx = 5 \ln|x| + \frac{1}{5} \cdot \frac{x^2}{2} \Big|_1^2 = 5 \ln 2 + \frac{4}{10} - \left(5 \ln 1 + \frac{1}{10} \right) = 5 \ln 2 + \frac{3}{10}$$

$$12. \int_0^1 5x + \sqrt{3x+1} dx = \int_0^1 5x dx + \int_0^1 \sqrt{3x+1} dx$$

$$\int_0^1 5x dx = 5 \cdot \frac{x^2}{2} \Big|_0^1 = \frac{5}{2} - 0 = \frac{5}{2} = 2\frac{1}{2}$$

$$u = 3x+1 \quad \Rightarrow \quad \frac{du}{dx} = 3 \quad \Rightarrow \quad \frac{1}{3} du = dx$$

$$\int \sqrt{3x+1} dx = \int \sqrt{u} \cdot \frac{1}{3} du = \int \frac{1}{3} u^{1/2} du = \frac{1}{3} \cdot \frac{u^{3/2}}{3/2} + C = \frac{1}{3} \sqrt{u}^3 \cdot \frac{2}{3} + C = \frac{2}{9} \sqrt{3x+1}^3 + C$$

$$\int_0^1 \sqrt{3x+1} dx = \frac{2}{9} \sqrt{3x+1}^3 \Big|_0^1 = \frac{2}{9} \sqrt{4}^3 - \frac{2}{9} \sqrt{1}^3 = \frac{16}{9} - \frac{2}{9} = \frac{14}{9} = 1\frac{5}{9}$$

$$\int_0^1 5x + \sqrt{3x+1} dx = 2\frac{1}{2} + 1\frac{5}{9} = 2\frac{9}{18} + 1\frac{10}{18} = 3\frac{19}{18} = 4\frac{1}{18}$$